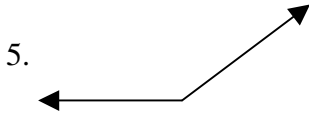
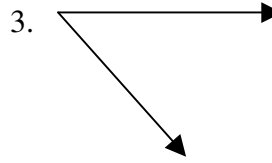
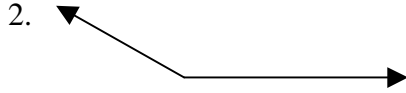


Angles

Classify each angle as acute, right, obtuse, or straight.



Name the requested angle by its three-letter identification.

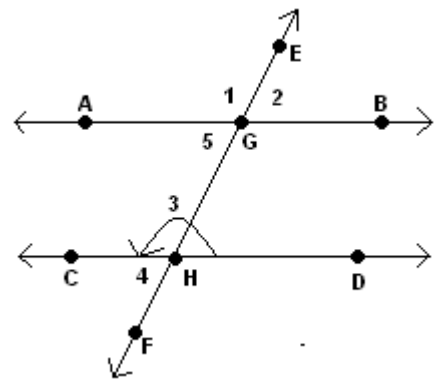
8. Angle 1: _____

9. Angle 2: _____

10. Angle 3: _____

11. Angle 4: _____

12. Angle 5: _____



Label each pair of lines as parallel, perpendicular, or (eventually, possibly) intersecting.

